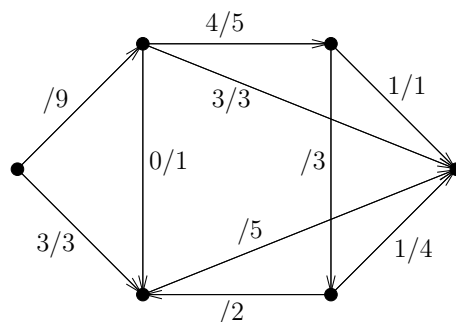


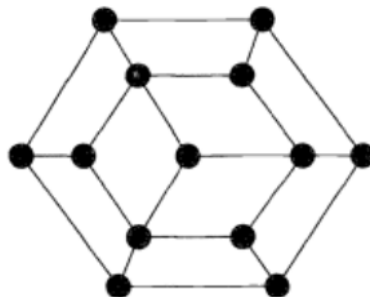
# GRAPHS AND NETWORKS (MATH20150)

## Problem sheet 9

1. Assume that the edges of  $K_{11}$  are coloured red and blue. Show that the blue graph and the red graph cannot both be planar. Hint: We know something about the number of vertices and edges in a planar graph.
2. In the following network, we have indicated the capacity, and some of the values of a map  $f : E \rightarrow \mathbb{R}_+$ . Determine the missing values so that  $f$  is a flow.

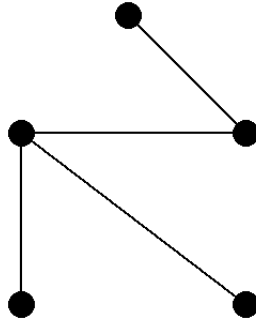


3. Let  $N$  be a network in which the capacity of every arc is even. Show that a maximum flow has even value.
4. (a) Prove that a bipartite graph with an odd number of vertices is not Hamiltonian.  
 (b) Show that the following graph is not Hamiltonian



- (c) Show that, if  $n$  is odd, it is not possible for a knight to visit all the squares of an  $n \times n$  chessboard exactly once and return to its starting point (using knight's moves). It is useful to observe that a knight's move always go from a square of one colour to a square of another colour.
5. Let  $G = (V, E)$  be a graph. The complement of  $G$  is the graph  $\bar{G}$  with set of vertices  $V$ , in which two vertices are adjacent if and only if they are not adjacent in  $G$ .

(a) Draw the complement of the following graph



(b) Show that the complement of a complete bipartite graph is the union of two complete graphs.